


Illuminating Global Education Through Indianic Values

NEW STANDARD GROUP OF INSTITUTES



HOME ASSIGNMENT 2023



Name.....

Class- 3rd Sec.

Branch.....

1. अपनी 'बिखरे मोती' सुलेख पुस्तिका का प्रतिदिन एक पृष्ठ लिखकर पृष्ठ संख्या 59 तक पूर्ण कीजिए।
2. दिए गए क्रिया शब्दों में से सही क्रिया शब्द छॉटकर वाक्य पूरे कीजिए—

आएँगे	देखूँगा	पीकर	उतर
-------	---------	------	-----

(क) मैं कल सिनेमा ————— ।

(ख) मेरे मामा दिल्ली से परसों ————— ।

(ग) राम दूध —————स्कूल गया।

(घ) सुरेश सीढ़ी से —————रहा है।

3. नीचे दिए गए वर्ग पहेली में भारत की प्रमुख नदियों के नाम दिए गए हैं। इनमें से पाँच नदियों के नाम छॉटकर गोला बनाइए और खाली स्थान पर लिखिए।

य	मु	ना	गो	कृ	ष्णा	_____
व्या	न	र्म	दा	गं	झे	_____
स	चि	ना	व	गा	ल	_____
ता	का	वे	री	नि	म	_____
प्ती	श्रा	स	त	लु	ज	_____

4. नीचे दिए गए शब्दों के विलोम शब्द लिखिए—

(क) रात — _____

(ख) मोटा— _____

(ग) काला— _____

(घ) ऊपर— _____

(ङ.) पूरा— _____

ENGLISH

1- Complete your cursive writing book up to page no. 45.

2- Rearrange the letters to form meaningful words.

(i) EARTCHE _____

(ii) SLINEGH _____

(iii) ORMCTEUP _____

(iv) YARLIRB _____

(v) HSPO _____

3- Write the common nouns for these groups of proper nouns.

(i) Delhi, Lucknow, Patna, Chandigarh

(ii) India, China, Pakistan, Srilanka

(iii) Mahabhart, Bible, Bhagwat Geeta

(iv) Rajiv Gandhi, Narendra Modi, Mahatma Gandhi

(v) Asia, Africa, Antarctica, Europe

4- Rewrite the following sentences changing the gender of the underlined nouns.

(i) The groom was a young man.

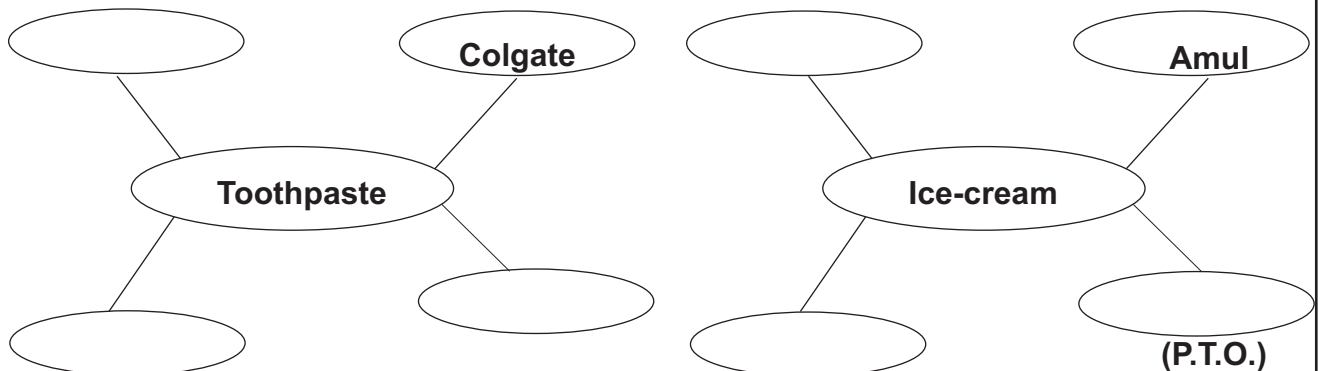
(ii) My sister knows your husband.

(iii) My uncle is a good host.

(iv) This girl is my niece.

(v) The headmaster advised the boys to work.

5- Write proper nouns for the following common nouns.



MATHS

1- Write in roman numeral:

- (i) 32 _____
- (ii) 25 _____
- (iii) 102 _____
- (iv) 500 _____
- (v) 76 _____

2- Complete the following series:

- (a) 1, 4, 9 _____ . _____ . _____ .
- (b) 1, 8, 27 _____ . _____ . _____ .
- (c) 0, 2, 6, 12 _____ . _____ . _____ .

3- Match the following.

- (a) 1 leap year 24 hours
- (b) 7×6 100 paise
- (c) 1 rupee 39
- (d) 1 day 42
- (e) $30+9$ 366 days

4- Arrange the following in descending order (decreasing order)

- (a) 87, 98, 105, 263, 999 _____
- (b) 76, 872, 382, 753, 100 _____
- (c) 10, 13, 178, 205, 300 _____
- (d) 100, 500, 1000, 700, 200 _____

SCIENCE

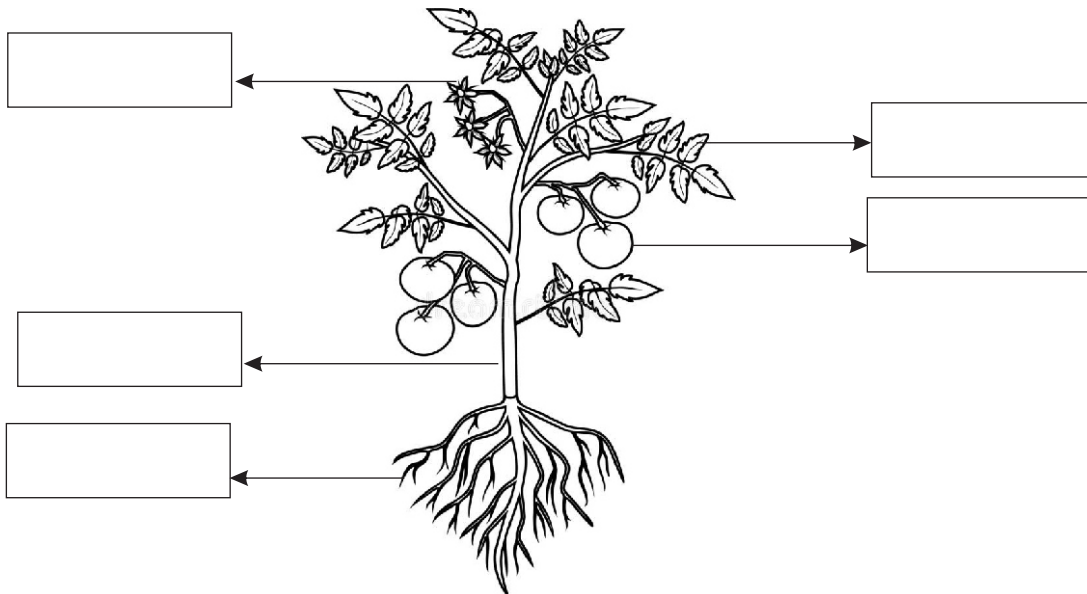
1- Give two examples of each of the following:-

- (a) Natural things _____, _____
- (b) Man made things _____, _____
- (c) Living things _____, _____
- (d) Non living things _____, _____

2- Name the following:-

- (a) Two trees that grow near your house. _____, _____
- (b) Two flowers that grow in your school garden. _____, _____

3- Label the parts of the plant



SOCIAL SCIENCE

1- Collect the picture of one famous dish from four different states and paste the picture in your fair notebook and write two sentences about each picture.

2- Choose the correct answer:

(i) Who travels to outer space?

- (a) An astronaut (b) A doctor
- (c) A Soldier (d) The police

(ii) The Indian National Flag is called the

- (a) Triveni (b) Triad (c) Tricolour

(P.T.O.)

COMPUTER

1- Fill the missing letters to name the system software.

(a) U _____ I _____

(b) L _____ N _____ X

(c) _____ IN _____ WS

2- Write the shortcut keys.

(a) Select All _____ (b) Close the Document _____

(c) New Document _____ (d) Print _____ (e) Save _____

ART

1- Make a basket and a chair with the help of matchsticks on A4 size white paper.

2- Draw and colour ladybug in art notebook.

MORAL TEACHING



- 1- Look at the picture. What will you do in this condition and describe it about 50 words.
